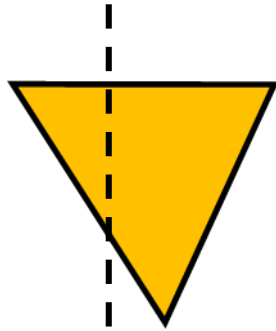



1) Is the line of symmetry correct?



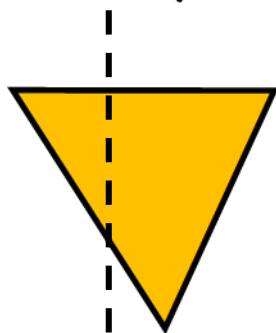
2) How many sides does a square have?

3) Is 17 odd or even?


4) How much money is there altogether?



1) Is the line of symmetry correct?



No



2) How many sides does a square have? 4

3) Is 17 odd or even? odd

4) How much money is there altogether?



10p